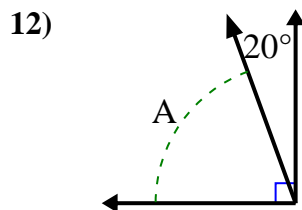
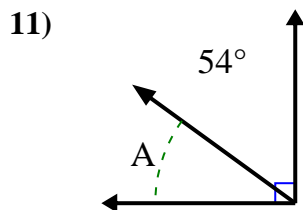
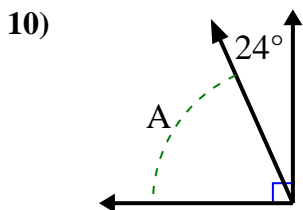
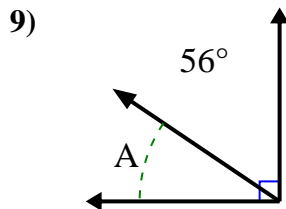
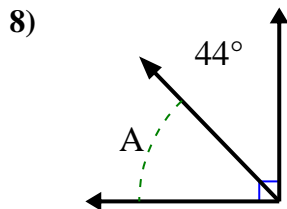
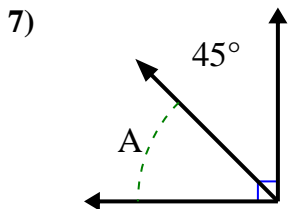
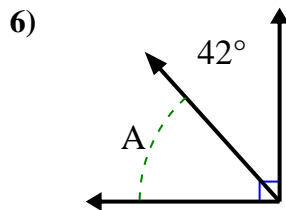
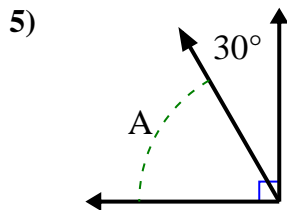
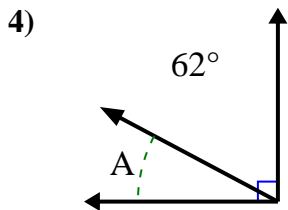
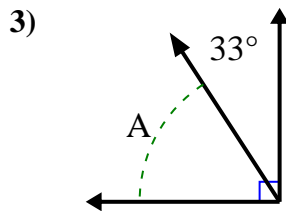
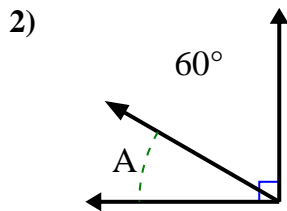
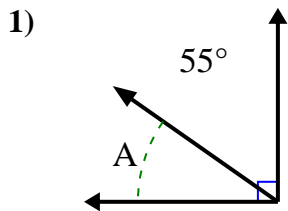




Find the value of 'A' in the set of complementary angles.

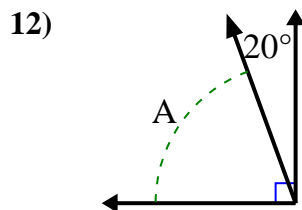
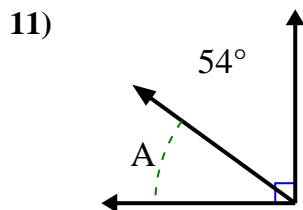
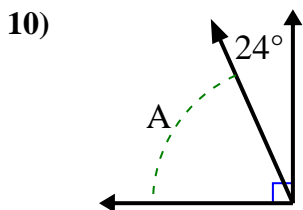
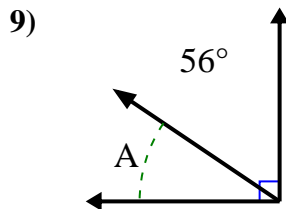
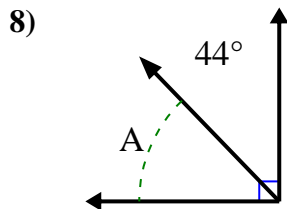
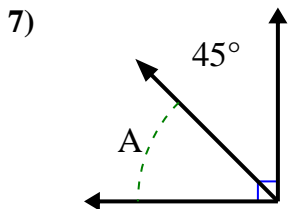
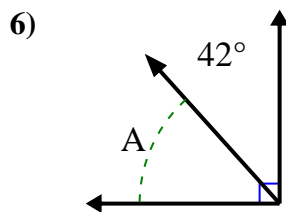
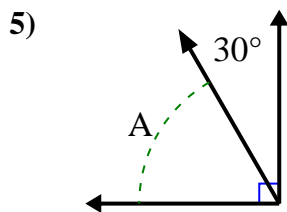
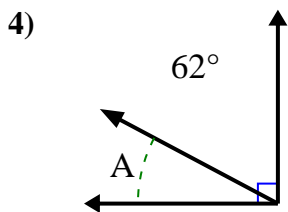
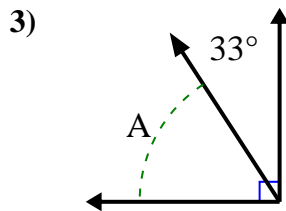
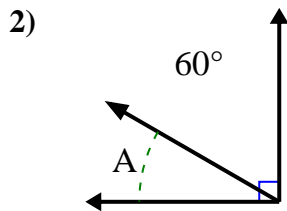
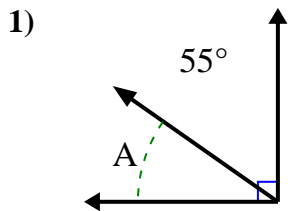
Answers



1. \_\_\_\_\_
2. \_\_\_\_\_
3. \_\_\_\_\_
4. \_\_\_\_\_
5. \_\_\_\_\_
6. \_\_\_\_\_
7. \_\_\_\_\_
8. \_\_\_\_\_
9. \_\_\_\_\_
10. \_\_\_\_\_
11. \_\_\_\_\_
12. \_\_\_\_\_



Find the value of 'A' in the set of complementary angles.



Answers

1. 35°

2. 30°

3. 57°

4. 28°

5. 60°

6. 48°

7. 45°

8. 46°

9. 34°

10. 66°

11. 36°

12. 70°